

Congruent Shapes

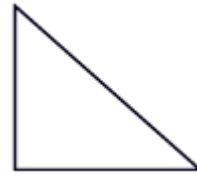

Congruent shapes are shapes that are the same size and shape.

Read each question. Circle your answer.

1. Are these congruent shapes?

yes


no



2. Are these congruent shapes?

yes

no



3. Are these congruent shapes? yes

no



Congruent Shapes

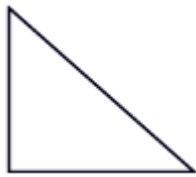
Congruent shapes are shapes that are the same size and shape.

Read each question. Circle your answer.

1. Are these congruent shapes?

yes

no



2. Are these congruent shapes?

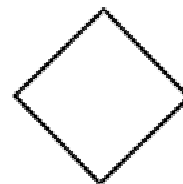

yes

no



3. Are these congruent shapes? yes

no



Congruent Shapes

Congruent shapes are shapes that are the same size and shape.

Read each question. Circle your answer.

1. Are these congruent shapes?

yes

no



2. Are these congruent shapes?

yes

no



3. Are these congruent shapes? yes

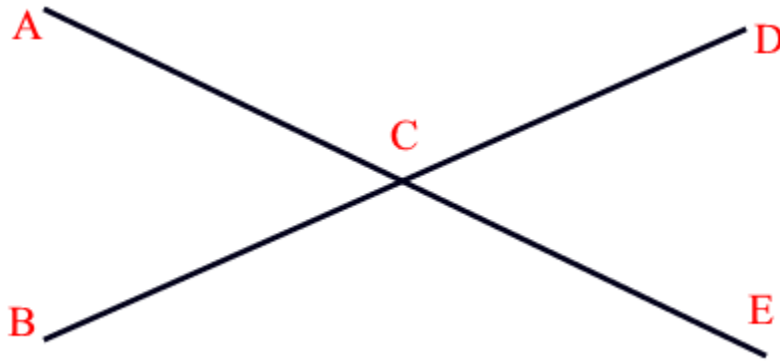
no



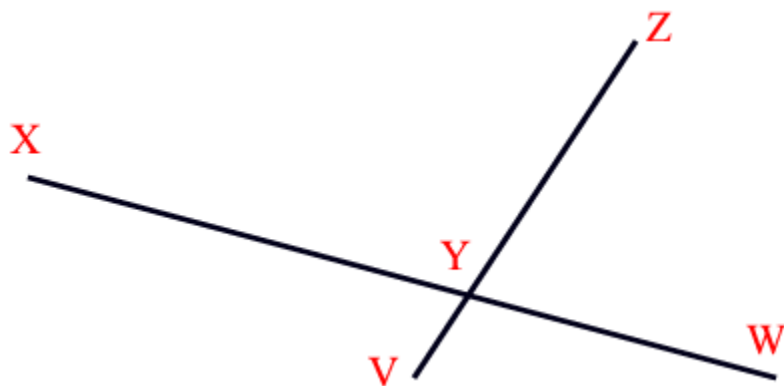
Intersecting Lines

Look at each of the following illustrations. Read each question. Circle your answer.

1. At what point do these lines intersect?



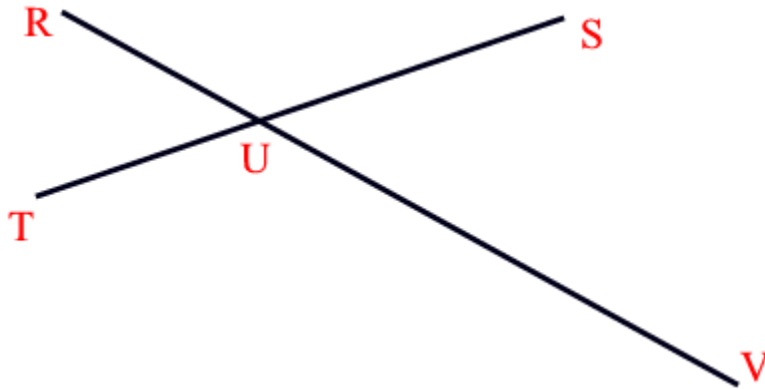
2. At what point do these lines intersect?



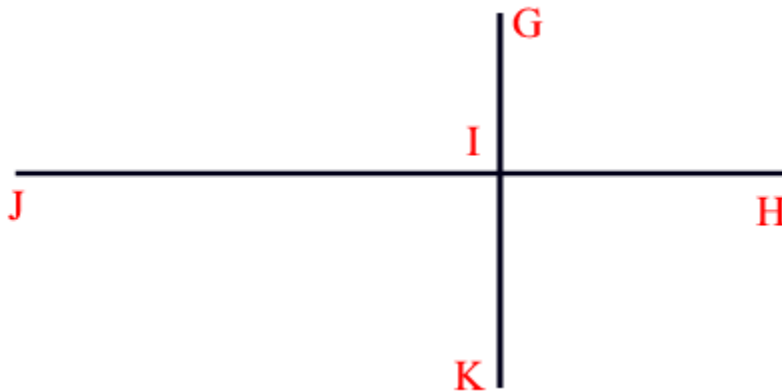
Intersecting Lines

Look at each of the following illustrations. Read each question. Circle your answer.

1. At what point do these lines intersect?



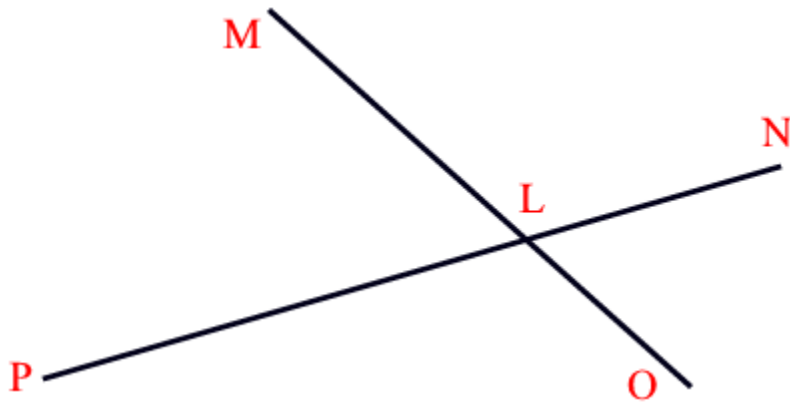
2. At what point do these lines intersect?



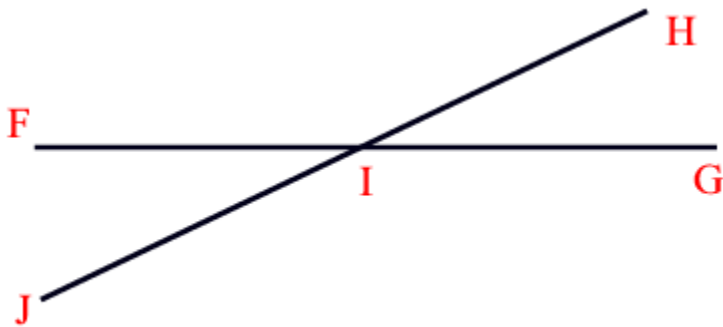
Intersecting Lines

Look at each of the following illustrations. Read each question. Circle your answer.

1. At what point do these lines intersect?



2. At what point do these lines intersect?



Geometry Practice

Circle the correct answer in each of the following problems.

1.



- a. This is a rectangle.
- b. This is a cylinder.
- c. These are intersecting lines.
- d. None of these

2.



- a. This is a circle.
- b. These are parallel lines.
- c. This is a cone.
- d. None of these

3.



- a. These are similar shapes.
- b. These are congruent shapes.
- c. These are not congruent shapes.
- d. None of these

Name _____

Date _____

4.



- a. These are both rectangles.
- b. These are congruent shapes.
- c. These are not congruent shapes.
- d. None of these

Name _____

Date _____

Answer Key

page 1 1. no
 2. yes
 3. no

page 2 1. yes
 2. no
 3. yes

page 3 1. no
 2. no
 3. no

page 4 1. C
 2. Y

page 5 1. U
 2. I

page 6 1. L
 2. I

pages 7-8 1. b
 2. b
 3. c
 4. b